

VIII. Major, Augmented, Minor, & Diminished Triads

Name: _____

A. Root Position

Sing and label the quality of each triad.


1. _____ 2. _____ 3. _____ 4. _____




5. _____ 6. _____ 7. _____ 8. _____




9. _____ 10. _____ 11. _____ 12. _____



13. _____ 14. _____ 15. _____ 16. _____



17. _____ 18. _____ 19. _____ 20. _____



21. _____ 22. _____ 23. _____ 24. _____



25. _____ 26. _____ 27. _____ 28. _____



29. _____ 30. _____ 31. _____ 32. _____



33. _____ 34. _____ 35. _____ 36. _____



37. _____ 38. _____ 39. _____ 40. _____

